



INDIAN SPACE RESEARCH ORGANISATION [HEADQUARTERS]

WRITTEN TEST FOR RECRUITMENT TO THE POST OF PURCHASE & STORES OFFICER

Test Booklet :

A

Date : 25.3.2007

Time : 1000 hrs to 1230 hrs.

	<i>No. of questions</i>
Part- A : Arithmetic, Test of Reasoning etc. (Objective type)	36
Part- B : English Grammar	32
Part-C : Area	36
Part-D : Descriptive type	02

INSTRUCTIONS

1. The question paper is in the form of test booklet.
2. A separate OMR answer sheet is provided to all candidates for answering Part-A, Part-B and Part-C.
3. A separate answer booklet is provided to all candidates for answering Part-D (Descriptive type). **Answer to be written by pen only.**
4. Each objective question is provided with a text and figures wherever applicable with multiple answers a), b), c) and d), which includes one correct answer.
5. Refer answer sheet instructions and use **HB pencil** for answering all the questions.
6. All questions, except Part-D, carry equal marks.
7. Multiple answers for a question will be regarded as wrong answer.
8. Although the test stresses on accuracy more than speed, it is important for you to use your time as effectively as possible.
9. Do not waste time on questions which are too difficult for you. Go on to other questions and come back to the difficult ones later.
10. Enter your name and roll number correctly on the OMR answer sheet.
11. Enter all information as per the instructions given in the answer sheet.
12. Space available in the Question booklet could be used for rough work, if required and no separate sheet will be provided.
13. At the end of the test (1) Written test Call Letter with photograph (2) OMR Answer Sheet and (3) Descriptive Answer sheet and (4) Test Booklet shall be returned to the Invigilator.



StudySite.org

Question Booklet for Purchase and Stores Officer

PART A

1. **Who wrote the first web browser?**
 - [a] Bill Gates
 - [b] Marc Andreessen and Eric Bina
 - [c] Tim Berners-Lee
 - [d] Steve Jobs
2. **When was the Constitution of India enacted, signed and adopted by the Constituent Assembly?**
 - [a] January 26, 1950
 - [b] December 11, 1946
 - [c] December 9, 1946
 - [d] November 26, 1949
3. **Who among the following have a right to vote in the Vice-Presidential election, but not in the Presidential election?**
 - [a] Judges of the Supreme Court.
 - [b] Ministers who are not members of either of the houses of the State.
 - [c] Nominated members of the Parliament.
 - [d] Members of Parliament who are absent from all meetings of the Houses for a period of sixty days without the permission of the House.
4. **Phillaur in Punjab, Azamgarh and Bijnor in UP. What links the winners of the 1989 elections in these three constituencies?**
 - [a] Five-time winners
 - [b] All BSP candidates
 - [c] All members of the first Lok Sabha
 - [d] There are no links.
5. **Unripe fruits contain**

[a] amino acid	[b] uric acid
[c] lactic acid	[d] malic acid
6. **Who was the first person to introduce the logarithm tables?**

[a] Benjamin Franklin	[b] T. A. Edison
[c] Napier	[d] Einstein
7. **Which plan was formulated against the backdrop of severe inflationary pressure? (The period of the plan was 1974-1979 but was terminated by the Janata Government in 1978, one year before the scheduled period.)**
 - [a] Fifth Five Year Plan
 - [b] Second Five Year Plan
 - [c] Third Five Year Plan
 - [d] Sixth Five Year Plan
8. **This famous business personality earned money by repairing toy trains when he was 13. His father escaped from the British Police in 1920 and landed in the USA with \$20 in his pocket and later married an American schoolteacher and settled in Philadelphia. His corporate headquarters is known as The Mountain. Identify him.**

[a] Nani Gopal Bose	[b] Amar Gopal Bose
[c] Anand Gopal Bose	[d] Shashikant Bose

9. "I would have been a biscuit-maker," he said, when asked in an interview what he would have been had it not been for his current job! Biscuit manufacturing would not have been a problem for him, as his father has been running Luckyland Biscuits for the past three decades, and it now is the third-biggest biscuit maker in Sri Lanka. Name him.
- [a] Sanath Jayasuriya
 - [b] Maravan Attapattu
 - [c] Rumesh Ratnayake
 - [d] Muttiah Muralidharan
10. The prolific Sir Donald Bradman, who passed away recently, was dismissed for a duck in his last Test innings and hence could not finish his career with an average of 100. Who denied him that singular honour?
- [a] Eric Hollies
 - [b] Larwood
 - [c] Tyldesley
 - [d] Jim Laker
11. Which is the biggest church in India?
- [a] St. Cathedral, Goa
 - [b] The Rachol Seminary, Goa
 - [c] Basilica of Bom Jesus, Goa
 - [d] Church of Our Lady of Rosary, Goa.
12. The arrests of which two prominent leaders of Congress caused serious unrest in Punjab finally leading to the Jallianwala Bagh massacre in the year 1919?
- [a] Dr.Kitchlu and Dr.Satyapal
 - [b] Dr.Kitchlu and Madan Mohan Malviya
 - [c] Madan Mohan Malviya and Dr.Satyapal
 - [d] Mohammed Ali Jinnah and Madan Mohan Malviya
13. Which of the following events is not related to the year 2001?
- [a] 'Agra Summit' between India and Pakistan
 - [b] Worst natural calamity in India: Gujarat Earthquake
 - [c] Enron bids farewell to Indian energy sector
 - [d] Three new states Chattisgarh, Uttaranchal and Jharkhand are created.
14. The layer which helps human beings on the earth to receive radio signals is?
- [a] Ionosphere
 - [b] Atmosphere
 - [c] Thermosphere
 - [d] Mesosphere.
15. In the development of black and white photo film
- [a] the silver salts are converted to metallic silver
 - [b] the silver salts are converted to bleaches
 - [c] the silver salts are converted to coloured dyes
 - [d] all of these

Question Booklet for Purchase and Stores Officer

16. $\frac{(856 + 167)^2 + (856 - 167)^2}{856 \times 856 + 167 \times 167}$ is equal to :
- [a] 1 [b] 2 [c] 689 [d] 1023
17. A number when divided by the sum of 555 and 445 gives two times their difference as quotient and 30 as the remainder. The number is :
- [a] 1220 [b] 1250
[c] 22030 [d] 220030
18. Which of the following set of fractions are arranged in perfect ascending order?
- [a] $\frac{2}{3}, \frac{3}{5}, \frac{7}{9}, \frac{9}{11}, \frac{8}{9}$
[b] $\frac{3}{5}, \frac{2}{3}, \frac{9}{11}, \frac{7}{9}, \frac{8}{9}$
[c] $\frac{3}{5}, \frac{2}{3}, \frac{7}{9}, \frac{9}{11}, \frac{8}{9}$
[d] $\frac{8}{9}, \frac{9}{11}, \frac{7}{9}, \frac{2}{3}, \frac{3}{5}$
19. A train starts full of passengers. At the first station, it drops one-third of the passengers and takes 280 more. At the second station, it drops one-half of the new total and takes 12 more. On arriving at the third station, it is found to have 248 passengers. Find the number of passengers in the beginning.
- [a] 278 [b] 288 [c] 296 [d] 275
20. Kiran had 85 currency notes in all, some of which were of R.100 denomination and the remaining of Rs.50 denomination. The total amount of all these currency notes was Rs.5000. How much amount did she have in the denomination of Rs.50?
- [a] 4000 [b] 3500 [c] 3000 [d] 4200
21. At an International Dinner, $\frac{1}{5}$ of the people attending were French men. If the number of French women at the dinner was $\frac{2}{3}$ greater than the number of French men, and there were no other French people at the dinner, then what fraction of the people at the dinner were not French?
- [a] $\frac{1}{5}$ [b] $\frac{2}{5}$ [c] $\frac{2}{3}$ [d] $\frac{7}{15}$



22. In Arun's opinion, his weight is greater than 65 kg but less than 72 kg. His brother does not agree with Arun and he thinks that Arun's weight is greater than 60 kg but less than 70 kg. His mother's view is that his weight cannot be greater than 68 kg. If all of them are correct in their estimation, what is the average of different probable weight of Arun?
- [a] 67.5 kg [b] 68.5 kg
[c] 69.5 kg [d] 66.5 kg
23. In an election between two candidates, 75% of the voters cast their votes, out of which 2% of the votes were declared invalid. A candidate got 9261 votes which were 75% of the total valid votes. Find the total number of votes enrolled in that election.
- [a] 16500 [b] 17000
[c] 16200 [d] 16800
24. If the manufacturer gains 10%, the wholesale dealer 15% and the retailer 25%, then find the cost of production of a table, the retail price of which is Rs.1265?
- [a] 1000 [b] Rs.500 [c] Rs.1200 [d] Rs.800
25. 60 kg of an alloy A is mixed with 100 kg of alloy B. If alloy A has lead and tin in the ratio 3 : 2 and alloy B has tin and copper in the ratio 1 : 4, then the amount of tin in the new alloy is :
- [a] 36 kg [b] 44 kg [c] 53 kg [d] 49 kg
26. A invested Rs.76,000 in a business. After few months, B joined him with Rs.57,000. At the end of the year, the total profit was divided between them in the ratio 2 : 1. After how many months did B join?
- [a] 5 months
[b] 4 months
[c] 3 months
[d] 2 months
27. 2 men and 3 boys can do a piece of work in 10 days while 3 men and 2 boys can do the same work in 8 days. In how many days can 2 men and 1 boy do the work?
- [a] $12\frac{1}{2}$ days [b] 12 days [c] $13\frac{1}{2}$ days [d] 13 days
28. Four years ago, the father's age was three times the age of his son. The total of the ages of the father and the son after four years will be 64 years. What is the father's age at present?
- [a] 32 years [b] 36 years
[c] 44 years [d] 40 years



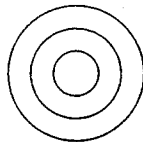
29. A rectangular grassy plot 110 m by 65 m has a gravel path 2.5 m wide all round it on the inside. Find the cost of gravelling the path at 80 paise per sq. metre.

[a] Rs.685 [b] Rs.675 [c] Rs.690 [d] Rs.680

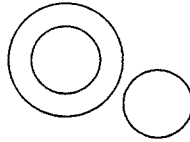
30. Two equal amounts of money was lent out at 6% and 5% simple interest respectively at the same time. The former is recovered two years earlier than the latter and the amount so recovered in each case is Rs. 2,880. Determine the amount that was lent out.

[a] Rs.1800 [b] Rs.1700 [c] Rs.1600 [d] Rs.1900


31. Which of the following gives the proper relation of *Tall men, Black haired people, Indians*?



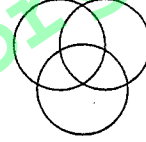
[a]



[b]

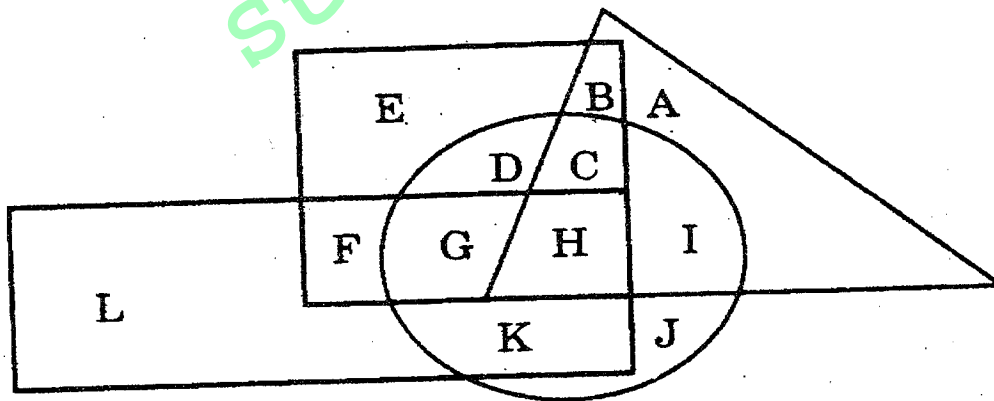


[c]



[d]

32. In the following diagram, the square represents girls, the circle tall persons, the triangle is for tennis players and the rectangle stands for the swimmers.



On the basis of the above diagram, answer the following question.

Which letter represents tall girls who are swimmers but don't play tennis?

(a) C (b) D (c) G (d) H

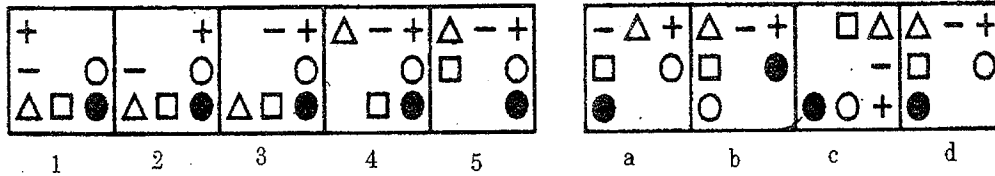


Question Booklet for Purchase and Stores Officer

33. The Following question consists five figures marked 1,2,3,4 and 5 called the problem figures followed by four other figures marked a, b, c, d called the answer figures. Select the figure from amongst the answer figures which will continue the same series as established by the five problem figures:

Problem Figures


Answer Figures



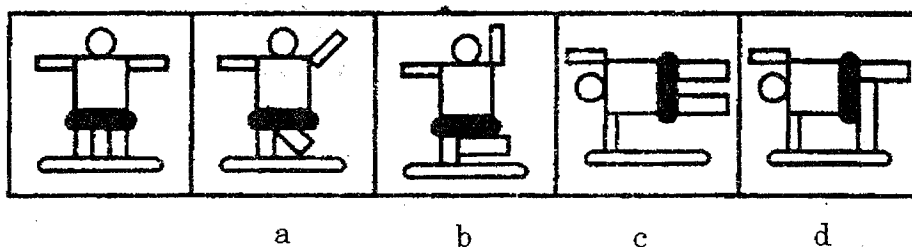
34. In the following question there is a set of four figures labeled 1, 2, 3, and 4 called the problem set followed by set of four other figures labeled a, b, c and d called the answer set. Figure 3 contains a Question Mark (?). Select suitable figure from the answer set which will substitute the question mark (?) so that a series is formed by the figures 1, 2, 3, and 4 taken in order. The label of the selected figure is the answer.

Problem Set

Answer Set



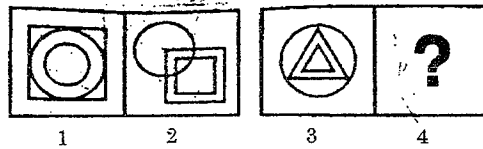
35. The following question consists of a set of five figures, the first of which is not labeled and makes the beginning of series continued in the successive figures labeled from a to d. However, the series will be established only if the positions of the two of the labeled figures are interchanged. The label of the earlier of the two figures is the answer.



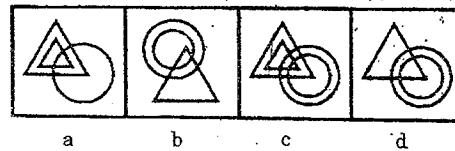
Question Booklet for Purchase and Stores Officer

36. The following question consists of two sets of figures 1, 2 and 3, 4 which constitute the problem set while figures a, b, c and d constitute the answer set. There is a definite relationship between figures 1 and 2. Establish a similar relationship between figure 3 and 4 by choosing a suitable figure 4 from the answer set.

Problem Set



Answer Set



END OF PART A

PART B

CHOOSE THE RIGHT WORD OR PHRASE WHICH IS MOST NEARLY SIMILAR IN MEANING TO THE WORD GIVEN IN CAPITAL LETTERS AND MARK APPROPRIATELY:

37. CAUTIOUSLY

- a) carefully b) genuinely c) secretly d) somewhat

38. ROBUST

- a) wear b) useless c) able d) stupid

39. CREPT

- a) walked b) pushed c) crawled d) pulled

40. RHETORIC

- a) the art of good painting
b) incapable of making right speech
c) the art of elegant speech or writing
d) the art of real writing

41. EPITAPH

- a) words written down in the history
b) words which are inscribed on the grave or the tomb in the memory of buried
c) a historical writing which can be obtained from any library
d) a memoriam for the dead

42. POLYGLOT

- a) One who plays more than one game
b) One who cannot play any sports
c) One who speaks many languages
d) One who provides lot of advices.

43. PHILOGYNIST

- a) one who practices philosophy
b) one who hates women
c) one who loves mankind
d) a lover of womankind.

CORRECT THE SENTENCES BY SUBSTITUTING WITH ONE OF THE OPTIONS FOR THE UNDERLINED WORDS IN THE SENTENCES

44. Eggs are usually sold in the dozen.

- a) by the dozen b) by dozen c) in dozen d) no change.

45. I have great pleasure in seeing you this morning.

- a) to see b) on seeing c) for seeing d) no improvement.



Question Booklet for Purchase and Stores Officer

46. The culprit was at last brought to law for his involvement in the crime.

- a) brought to prison b) brought to book c) brought to court.
d) no change.

FILL IN THE BLANKS IN THE FOLLOWING SENTENCES OUT OF THE WORDS GIVEN BELOW:

47. She took an umbrella with her to.....getting wet.

- a) deny b) avoid c) prevent d) resist

48. The flood victim wenta very painful experience.

- a) By b) through c) in for d) out of

SELECT THE COMBINATION OF NUMBERS SO THAT LETTERS/WORDS ARRANGED ACCORDINGLY WILL FORM A MEANINGFUL WORD:

49. K A T C E L
1 2 3 4 5 6

- a) 4 2 3 1 5 6 b) 1 2 4 5 6 3 c) 6 5 3 2 4 1 d) 3 2 4 1 6 5

50. R E S T L U
1 2 3 4 5 6

- a) 3 4 6 1 2 5 b) 4 5 3 2 6 1 c) 5 6 3 4 1 2 d) 6 5 2 1 4 3

51. J C O P T E R
1 2 3 4 5 6 7

- a) 1 3 4 5 6 7 2 b) 2 6 4 5 1 3 7 c) 7 6 4 5 1 3 2 d) 4 7 3 1 6 2 5

IN EACH OF THE FOLLOWING QUESTIONS, AN IDIOMATIC EXPRESSION/A PROVERB HAS BEEN GIVEN, FOLLOWED BY SOME ALTERNATIVES. CHOOSE THE ONE WHICH BEST EXPRESSES THE MEANING OF THE GIVEN IDIOM/PROVERB.

52. To frame a person

- a) to befool someone
b) to make one appear guilty
c) to praise someone
d) a narrow escape.

53. To spill the beans

- a) To reveal secret information b) to misbehave c) to keep secrets
d) to talk irrelevant



INDIAN SPACE RESEARCH ORGANISATION

Page : 9

Question Booklet for Purchase and Stores Officer

EACH OF THE FOLLOWING IDIOMS IS FOLLOWED BY SOME ALTERNATIVES. CHOOSE THE ONE WHICH BEST EXPRESSES ITS MEANING.

54. To blaze trail

- a) to set on fire
- b) to be annoyed
- c) to vehemently oppose
- d) to initiate work in a movement

55. To have brush with

- a) to start painting
- b) to have good and pleasing terms
- c) to be impressed
- d) to have a slight encounter

IN EACH OF THE FOLLOWING QUESTIONS, A SENTENCE HAS BEEN GIVEN IN ACTIVE (OR PASSIVE) VOICE. OUT OF THE FOUR ALTERNATIVE SUGGESTED, SELECT THE ONE WHICH BEST EXPRESSES THE SAME SENTENCE IN PASSIVE (OR ACTIVE) VOICE

56. The French surrendered Quebec to the English in 1759

- a) Quebec was surrendered by the French to the English in 1759.
- b) Quebec was surrendered to the English in 1759 by the French
- c) The English were surrendered Quebec in 1759 by the French.
- d) Quebec was surrendered in 1759 by the French to the English

57. My uncle promised me a present

- a) A present was promised by my uncle to me
- b) I was promised a present by my uncle
- c) I had been promised a present by my uncle
- d) I was promised by my uncle a present

58. It is time to ring the bell

- a) It is time the bell rings
- b) It is being time to ring the bell
- c) It is time for the bell to ring
- d) It is time for the bell to rung

IN EACH OF THE FOLLOWING QUESTION A WORD HAS BEEN WRITTEN IN FOUR DIFFERENT WAYS, OUT OF WHICH ONLY ONE IS CORRECTLY SPELT. FIND THE CORRECTLY SPELT WORD.

- 59. a) Sedantry b) Sedentery c) Sedentary d) Sedantary
- 60. a) Scriptur b) Skripture c) Scripture d) Scripcher
- 61. a) Grametic b) Grammetic c) Grammatic d) Gramatic



IN EACH OF THE FOLLOWING SENTENCES, CHOOSE THE WORD OPPOSITE IN MEANING TO THE *ITALICIZED* WORD TO FILL IN THE BLANKS

62. My plans may sound rather *nebulous* to you, but they are very to me
a) clear b) concrete c) prominent d) conspicuous
63. Never *dissipate* energy resources, but always them
a) Utilise b) Organise c) Mobilise d) conserve
64. History has seen more wars than *civil* wars
a) Political b) Urban c) Military d) Rural

PICK OUT THE WORD THAT IS MOST NEARLY OPPOSITE IN MEANING OF THE WORD GIVEN IN CAPITALS

65. REDOLENT
a) pesticised b) sticky c) yellowish d) stinking
66. ADVERSITY
a) enmity b) severity c) prosperity d) calamity
67. AROMATIC
a) tart b) disagreeable c) sour d) odorous
68. JOCOSE
a) dull b) humorous c) playful d) diseased

END OF PART B



PART C

69. Freedom of Trade & Commerce is a right protected by the Constitution of India as per which article?

- a) Article 299
- b) Article 301
- c) Article 300
- d) Article 302

70. "Consensus ad idem" means

- a. Both the parties agree the same thing in the same sense
- b. Both the parties agree the same thing in different sense
- c. Both the parties do not agree the same thing in the same sense
- d. Both the parties do not agree the same thing in different sense

71. An agreement to come to dine

- a. is a contract
- b. is a mere agreement
- c. is an enforceable (by law) agreement
- d. none of the above

72. Under the following Acts viz., The Arbitration, The Land Acquisition Act 1894, The Indian Trust Act 1882, The Indian Railways Act, 1890, the arbitration is

- a. obligatory & compulsory
- b. not obligatory & not compulsory
- c. an act of parties
- d. none of the above

73. The Seller placing the goods onboard a ship at his own expense is called

- a. FOB Contract
- b. Ex-ship contract
- c. FAS Contract
- d. CIF Contract

74. On the basis of Chellaiah Committee report initially tax was imposed on three special services. One of the services is

- a) Transportation
- b) Stock Broker
- c) Photography
- d) Banking

75. The Finance Act 2006 has expanded the services by ____ to come under Service Tax.

- a) 9
- b) 10
- c) 15
- d) 20

76. The Power to adjudicate any penalty under service tax rests with Additional Commissioner of Central Excise to the extent of

- a) above Rs.10 lakhs but not exceeding Rs.20 lakhs
- b) above Rs.20 lakhs but not exceeding Rs.50 lakhs
- c) Above Rs. 50 lakhs but not exceeding Rs.1 crore
- d) None of the above

77. As per Central Excise rules, when the final product is exempted and if the assessee opts not to maintain separate accounts in respect of inputs utilized what is the 'amount' payable by the assessee

- a) 10% of the total price (excluding taxes) of the exempted final product
- b) 10.2% of the total price (excluding taxes) of the exempted final product
- c) 10% of the total price (including taxes) of the exempted final product
- d) 10.2% of the total price (including taxes) of the exempted final product

78. As stages of production and / or sales continue, each subsequent purchaser has to pay tax again and again on the material which already suffered tax. This is called....

- a) Modvat
- b) Cenvat
- c) Cascading effect
- d) Rule 57 cc of Modvat & Rule 6(3)(b) of Cenvat

79. e-Procurement is the most important area of development in the

- a) B2B e-commerce arena
- b) C2C e-commerce arena
- c) D2D e-commerce arena
- d) E2E e-commerce arena

80. EDI means

- a) Extension of Data Interchange
- b) Electronic Data Interchange
- c) Economic Data Interchange
- d) Educational Data Interchange

81. CST Act envisages three types of punishments in respect of certain punishments. One of the punishments such as Imprisonment & fine can be imposed by
- a) Sales Tax authorities
 - b) Court of Law
 - c) Board of Direct Taxes
 - d) None of the above
82. The Central Government gets the power to make rules for carrying out the provisions of service tax
- a) as per section 94
 - b) as per section 95
 - c) as per section 87
 - d) as per section 86
83. Which copy of the 'shipping bill for export of goods' will be considered as the claim for drawback of duty.
- a) Original Copy
 - b) Duplicate Copy
 - c) Triplicate Copy
 - d) Quadruplicate Copy
84. The Article 366 (29-A) to the constitution which was introduced by the constitution (46th amendment) Act 1982 enabled the states to legislate and incorporate.
- a) Works Contract Tax
 - b) Sales Tax
 - c) Service Tax
 - d) Central Sales Tax
85. Section 170 and 171 of the Indian Contract Act 1872 deals with
- a) Warranty & Guarantee
 - b) Particular Lien & General Lien
 - c) Bailor's & Bailee's rights
 - d) Purchaser's & Contractor's rights
86. One of the following laws have an indirect impact on the purchasing executive
- a) Law of contract
 - b) Law of Sale of goods
 - c) Law of agency
 - d) Law of trade marks



87. Present Value of One Rupee earned a year later at the Rate of 10% discount is

- a) Re.0.909
- b) Rs.1.10
- c) Re.0.099
- d) Re.0.09

88. Contract of guarantee provides

- a) Surety
- b) Security
- c) Understanding
- d) None of the above

89. A good starting point in developing an inventory system can be said as

- a) Inventory development management system
- b) Value analysis method
- c) Economic order quantity method
- d) ABC analysis method

90. A buyer ordered 3000 tins of canned fruit to be packed in cases each case containing 30 tins. The seller sent the tins of canned fruit packed in cases each case containing 24 tins. The court held that the buyer had a right to reject it. The right is from what section of the Act.

- a) Section 15 of Sale of Goods Act
- b) Section 11 of Sale of Goods Act
- c) Section 14 of Sale of Goods Act
- d) Section 16 of Sale of Goods Act

91. Highest IN first OUT (HIFO) method, though not used in the industry, is a modification of

- a) First in first out (FIFO) method
- b) Last in first out (LIFO) method
- c) Next in first out (NIFO) method
- d) None of the above

92. This method can be very effectively used for planning, scheduling and co-ordinating different activities and reviewing the progress in project buying.

- a) ABC analysis method
- b) EOQ method
- c) FIFO method
- d) PERT method



Question Booklet for Purchase and Stores Officer

93. "We live by sales and make our profit from materials", "uncontrolled inventory is industry's cancer". These are the slogans to the

- a) "Profit center" concept
- b) "Management " concept
- c) "Inventory" concept
- d) None of the above

94. 'A' agrees to supply a suit to 'B' by 15th November, which the latter wants to wear on the day of his marriage to be held on 16th November. The time of delivery of the suit is

- a) a warranty
- b) a condition
- c) an agreement
- d) none of the above

95. As per Indian Law a contract of a lunatic as well as drunken person is

- a) enforceable in a court of law
- b) void
- c) acceptance
- d) not enforceable in a court of law

96. As per section 2(g) of Central Sales Tax Act 1956, the following is included in the definition of 'sale'

- a) Sale of intoxicated drink
- b) Pledge
- c) Hypothecation
- d) Mortgage

97. "Penalty in lieu of prosecution" under CST Act means

- a) dealer agreeing to pay a fine and sales tax authorities agree to drop further action in respect of the offence
- b) dealer agreeing to pay a fine with a condition that sales tax authorities have to drop further action in respect of the offence
- c) dealer agreeing to sales tax authorities proceeding with further action in respect of the offence without paying any fine.
- d) Dealer informing to sales tax authorities their unwillingness either to pay fine or to sales tax authorities taking further action in respect of the offence.

98. "Implied authority" as per "Partnership Act 1932" means

- a) The act of a partner done by him as an agent in the usual course of business is an act of himself.
- b) The act of a partner done by him as an agent in the usual course of business is an act of the other partner.
- c) The act of a partner done by him as an agent in the usual course of business is an act of the firm.
- d) The act of both the partners in the usual course of business as an act of themselves.

99. If the Registrar of the companies finds the documents to be satisfactory, he registers them and enters the name of the company in the register of companies and issues a certificate called

- a) Certificate of Registration
- b) Certificate of incorporation
- c) Certificate of compliance
- d) Certificate of entry.

100. Section 6 of the Companies Act 1956 defines relative as "the one is related to the other in the manner indicated in Schedule 1-A of Companies Act". Which of the following relationship is part of the Schedule 1A?

- a) Daughter's husband's sister
- b) Daughter's daughter's husband
- c) Daughter's daughter's mother in law
- d) Daughter's daughter's father in law

101. When the parties to a contract agree to substitute the existing contract with a new contract it is called

- a) Amended contract
- b) Novation
- c) Modified contract
- d) Substitute contract

102. EOQ is arrived at by the following formula

- a) $\sqrt{2RCc/MCo}$, where 'R' is price per unit, 'Cc' is carrying cost; 'M' is annual demand; 'Co' is ordering charges.
- b) $\sqrt{2MCo/RCc}$, where 'M' is annual demand, 'Co' is ordering charges, 'R' is price per unit, and 'Cc' is carrying cost.
- c) $\sqrt{2MR/CoCc}$, where 'M' is annual demand, 'R' is price per unit, 'Co' is ordering charges, and 'Cc' is carrying cost.
- d) $\sqrt{2MCc/RCo}$ where 'M' is annual demand, 'Cc' is carrying cost. 'R' is price per unit, 'Co' is ordering charges,

103. This scheme is intended to provide financial assistance for Export Promotion Councils, Industry and Trade Associations, Agencies of State Governments, Indian Commercial Missions abroad.

- a) Market Access Initiative (MAI)
- b) Marketing Development Assistance (MDA)
- c) SEZ
- d) EHTP



104. The formula for arriving at Positive Net Foreign Exchange Earnings is _____ where 'A' is the FOB value of exports by the EOU and 'B' is the sum of total CIF values of all imported inputs, imported capital goods, the value of all payments made in FE.

- a) Positive NFE = $B - A > 0$
- b) Positive NFE = $A - B > 0$
- c) Positive NFE = $A - B < 0$
- d) Positive NFE = $B - A < 0$

END OF PART C

PART D

I. Write an essay on any one of the topics in not exceeding 800 words :-

1. Atrocities against women in India are being effectively tackled by the Government of India. Do you agree or not and explain why ?
2. A manned mission to the Moon – A reality or Myth
3. Indo-US Nuclear agreement – A boon or bane
4. Production of India's indigenous weapons has come of age – Explain

II. In the following passage, there are blanks, each of which has been numbered. These numbers are printed below the passage and against each, three or four words are suggested, one of which fits the blank appropriately. Find out the appropriate word.

Some scholars were exploring the forests of Middle America. They discovered, during their exploration some buildings which were in ruins. These buildings were (1).....ruined by the encroaching forest. It was also clear that these buildings were no ordinary structures. They were remnants of a (2).....civilisation. The scholars got interested. They excavated more and discovered (3).....their utmost surprise the remains of a flourishing civilisation – the Mayan's (4).....they named it. Thus, it was as late as in (5).....19th century that the secrets of a new civilisation were (6).....For some time, the scholars believed that the Mayans must have (7).....the descendants of ancient Egyptians or one of the lost tribes of Israel; or perhaps a brand of South East Asia's immigrants. However, they could not come to a unanimous decision. Nonetheless, the fact remains that even to-day the Mayan culture is one of (8).....most fascinating ancient civilisations. This civilisation was situated in the (9).....of Middle America. It covered area equivalent to France, (10).....spread across Guatemala, Belize and some parts of Mexican Honduras. It started in 2500 B.C. and continued its progress till 34 (11).....later. Throughout its period of progress, the people struggled against the invading (12).....They use to burn the plants and make the land (13).....for cultivation. Their staple food was maize. But even while (14).....for existence, they found time to build remarkable buildings for (15).....they used mortar, sandstone and volcanic rock. The buildings do tell us about the technological advances they had attained.

- | | | | |
|----|------------------|---------------|----------------|
| 1. | (a) reasonably | (b) surely | (c) apparently |
| 2. | (a) ordinary | (b) new | (c) great |
| 3. | (a) to | (b) at | (c) for |
| 4. | (a) when | (b) as | (c) while |
| 5. | (a) at | (b) then | (c) the |
| 6. | (a) unparalleled | (b) unearthed | (c) unmatched |
| 7. | (a) been | (b) become | (c) being |

Question Booklet for Purchase and Stores Officer

- | | | | | | | |
|-----|-----|--------------|-----|------------|-----|----------|
| 8. | (a) | an | (b) | a | (c) | the |
| 9. | (a) | head | (b) | heart | (c) | tail |
| 10. | (a) | and | (b) | yet | (c) | but |
| 11. | (a) | years | (b) | centuries | (c) | decades |
| 12. | (a) | civilisation | (b) | enemies | (c) | forests |
| 13. | (a) | fertile | (b) | good | (c) | properly |
| 14. | (a) | fighting | (b) | struggling | (c) | doing |
| 15. | (a) | that | (b) | which | (c) | it |

END OF PART D

